










MATHEMATICS FOR LIVING

MONEY WORKSHEET 4: COUNTING COINS

NAME: _____

DATE: _____

How much in each of these coin bundles?

 <p style="text-align: center;">A. CALCULATIONS:</p>	 <p style="text-align: center;">B. CALCULATIONS:</p>	 <p style="text-align: center;">C. CALCULATIONS:</p>
 <p style="text-align: center;">D. CALCULATIONS:</p>	 <p style="text-align: center;">E. CALCULATIONS:</p>	 <p style="text-align: center;">F. CALCULATIONS:</p>
 <p style="text-align: center;">G. CALCULATIONS:</p>	 <p style="text-align: center;">H. CALCULATIONS:</p>	 <p style="text-align: center;">I. CALCULATIONS:</p>

Which bundle has the most? _____ Which bundle has the least? _____

